

SECTION A: 35 MARKS

QUESTION 1

TOTAL: 13 MARKS

1.1) Define contour lines. (2)

1.2) Complete the following statements:

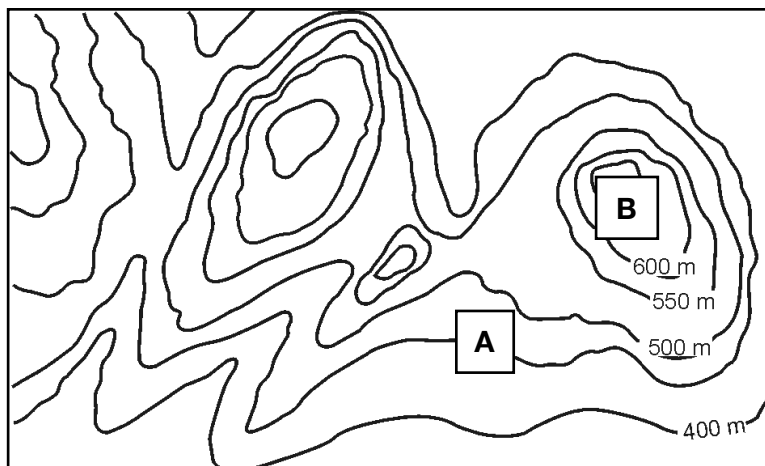
1.2.1) Sea level is at ____ m. (1)

1.2.2) The height difference between any two contours is called _____. (1)

1.2.3) Rivers flow in _____. (1)

1.2.4) A _____ is the wedge of hilly land where two rivers flow. (1)

1.3) Look at the contour map below and answer the questions that follow:



1.3.1) Calculate the contour interval. (2)

1.3.2) What are the heights at points A and B? (2)

1.4) What term do we give to the steepness of a slope? (1)

1.5) How do we tell the difference between a steep slope and a gentle slope from a contour map? (2)

QUESTION 2

TOTAL: 22 MARKS


2.1) Look at the map below and answer the questions that follow:



2.1.1) The scale for the map is 1:250 km. Explain what this means. (1)

2.1.2) If the distance from Durango to Honduras is 8cm, what would the actual distance be on the ground? (3)


2.2) Look at the following map of Cape Town below and answer the following questions:



- 2.2.1) What is this kind of map called? (1)
- 2.2.2) List three features of this kind of map. (3)
- 2.2.3) How can height be shown? (1)

2.3) Topographic maps all have the same scale. What is this scale? (2)

2.4) Complete the table below, by filling in the missing information.

Feature	Symbol	Natural or Constructed
2.4.1)	● WT	Constructed
Lighthouse	2.4.2)	2.4.3)
2.4.4)		2.4.5)
National road	2.4.6)	2.4.7)

(7)

2.5) Explain the difference between perennial and non-perennial rivers. (2)

2.6) Draw the correct symbols for a trig beacon and for spot height. (2)

SECTION B: 40 MARKS

QUESTION 3

TOTAL: 20 MARKS

3.1) Development can be defined as *becoming better, stronger and more advanced*.

Discuss the three main aspects of development. (9)

3.2) Two indicators of development are HDI and GDP. Explain what they are. (4)

3.3)

In 2019, **Norway** ranked 1st with a **HDI of 0.954**. **South Africa** ranked 113th on **0.705**, while **Zimbabwe** ranked 150th with **0.563**.

The **life expectancy** in **South Africa** and **Zimbabwe** **63** and **61** years old respectively. **Norway**, on the other hand, has a life expectancy of **82.3** years old.

From the information above, answer the following:

3.3.1) Explain the scale for HDI and what is measured. (2)

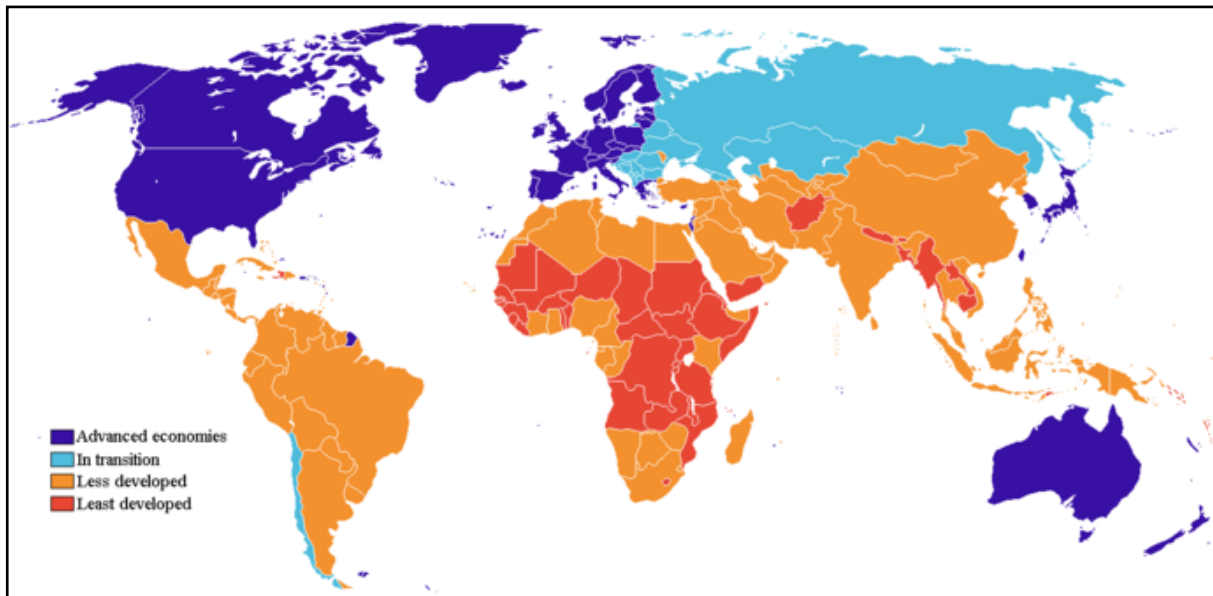
3.3.2) What do the HDIs of the above countries indicate? (2)

3.3.3) Discuss why South Africa and Zimbabwe have similar life expectancies, while Norway's is much higher. (3)

QUESTION 4

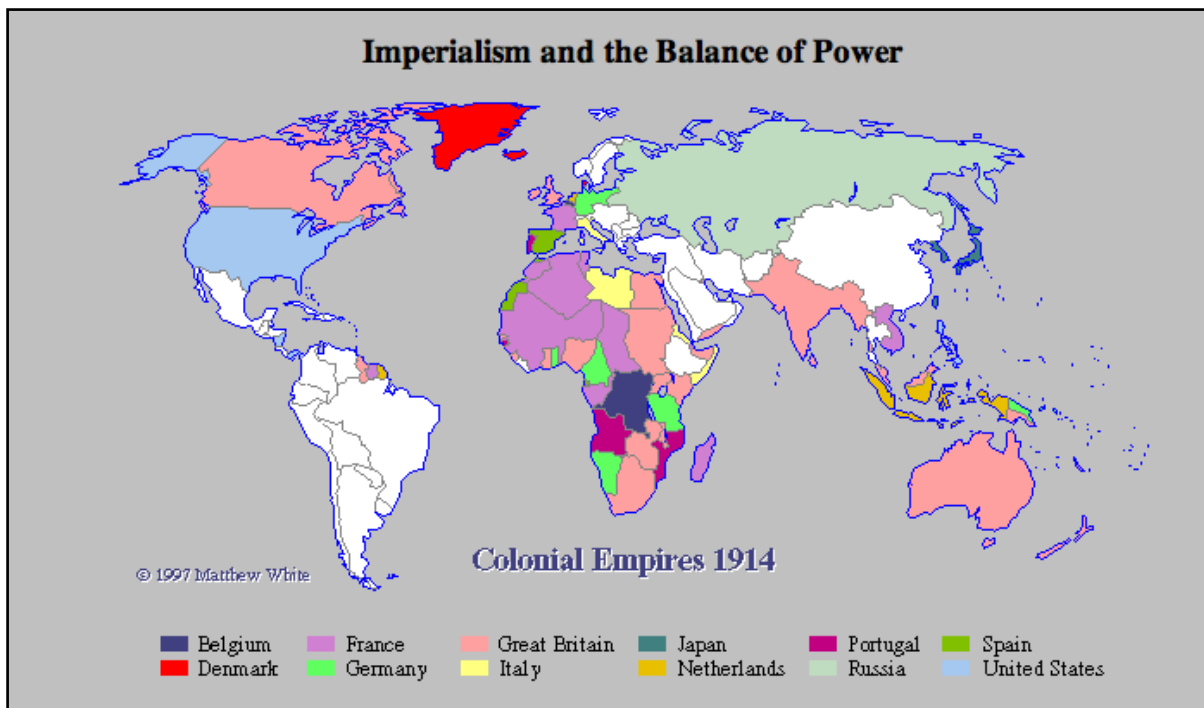
TOTAL: 10 MARKS

Use the following maps to answer the questions below:



World Map indicating development of countries

KEY	
Purple	Advanced economies
Light blue	In transition
Orange	Less developed
Red	Least developed



World map indicating the Colonial Empires in 1914

4.1) Define colonialism. **(2)**

4.2) *“Today, many ex-colonies still have huge developmental problems.”*
By drawing on comparisons from the two maps above, explain the truth of this statement. **(4)**

4.3) Great Britain had a number of colonies. Name four countries which were under Great Britain’s colonial empire. **(4)**

QUESTION 5

TOTAL: 10 MARKS

5.1) Describe how trade can benefit the development of a country. **(2)**

5.2) What are trade imbalances? **(2)**

5.3.1) There are a number of ways countries can implement unfair trade. Name them. **(4)**

5.3.2) Discuss one of the above mentioned ways to implement unfair trade. **(2)**